

AN ACTIVITY IN THE STYLE OF “PROOF WITHOUT WORDS” RELATED TO ALTITUDES IN A TRIANGLE

Victor Oxman^a & Moshe Stupel^b

^aWestern Galilee College; ^bShaanan College

1 INTRODUCTION

Mathematics educators recognize the power of posing tasks with multiple solution strategies (Smith & Stein, 1998; Star et al., 2015). When students engage in multiple problem solving approaches, they begin to see connections between various areas of mathematics. Moreover, they begin to see mathematics as a means of communication with others. Without question, solving problems in multiple ways is an essential element in teaching and learning mathematics (National Council of Teachers of Mathematics, 2000; Polya, 2004; Schoenfeld, 2014). GeoGebra can assist in designing such learning activities (Oxman & Stupel, 2018). We provide one example in the following discussion, a proof-oriented task that we pose to students in introductory geometry classrooms.

Specifically, we engage students in a study of triangle altitudes through a “proof without words”—a format that can be used or adapted when teaching various geometry topics. Our activity fosters different ways of thinking that yield unexpected, short, and beautiful solutions. Teachers are encouraged to create similar lessons based on our example and this approach.

2 LAUNCHING THE ACTIVITY

Consider $\triangle ABC$ illustrated in Figure 1.

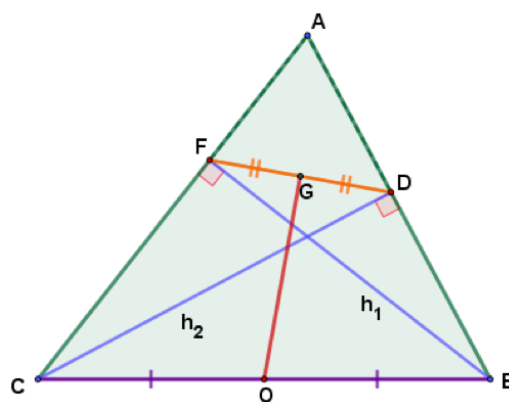


Figure 1. Students are asked to determine properties of $\angle FGO$.

Segments \overline{BF} and \overline{CD} are altitudes from vertices B and C , respectively. Points O and G are the midpoints of \overline{BC} and \overline{DF} , respectively. The applet (<https://www.geogebra.org/m/bnvdggcn>) can be used to look for relationships. For instance, by dragging the vertices, it appears that $\angle FGO$ is right. In addition, look for properties and relationships among points B, D, F , and C . Feel free to click the HINT1 and HINT2 checkboxes included in the applet.

You might have noticed that points B, D, F , and C are *conyclic* (located on the same circle). Why is this? Take a few moments to convince yourself of this fact, then find the center of the circle. What relationship do segments \overline{FD} and \overline{OG} share?

In our classrooms, we ask our students to state the theorem justifying that segments \overline{OG} and \overline{FD} are perpendicular. We ask them to explain what happens when angles $\angle A$, $\angle B$ or $\angle C$ are right. *Do you see what happens when any of these angles are right?* Take a few moments to consider these scenarios with the GeoGebra sketch.

Students can employ multiple strategies for justifying that segments \overline{OG} and \overline{FD} are perpendicular. For instance, students can obtain a hint by turning off HINT1 then clicking the HINT2 checkbox). Students will notice that the segments \overline{FO} , \overline{DO} , \overline{CO} and \overline{BO} are marked as congruent (Figure 3). Teachers should prompt students to state which principle allows us to conclude that these segments are equal.

If students need more hints at this stage, ask them to justify that triangles $\triangle FGO$ and $\triangle DGO$ are congruent and, thus, angles $\angle FGO$ and $\angle DGO$ are right angles. They can also argue that segment \overline{OG} is the median of the base \overline{DF} of an isosceles triangle and, hence, \overline{OG} is also perpendicular to segment \overline{FD} .

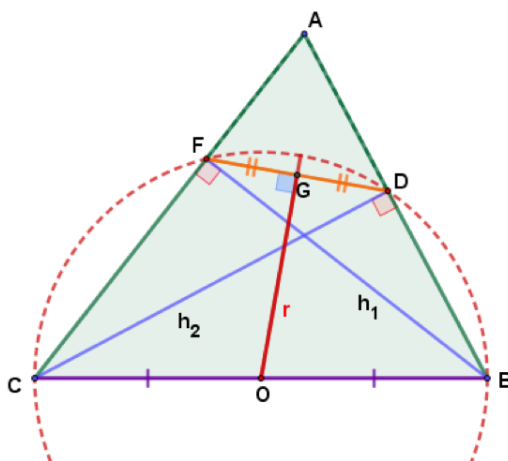


Figure 2. Points B, C, D , and F lie on a circle centered at O with radius r .

The presented miniature gives an idea of the use of GeoGebra to find various solutions for the same problem. Let's note the special role of the HINT buttons in the step-by-step progress in the search for solutions.

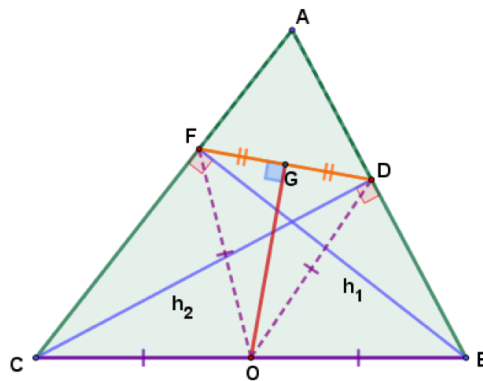


Figure 3. Construction of inner triangle $\triangle DFO$.

REFERENCES

- National Council of Teachers of Mathematics (2000). *Principles and standards for school mathematics*. NCTM.
- Oxman, V. & Stupel, M. (2018). Various solution methods, accompanied by dynamic investigation, for the same problem as a means for enriching the mathematical toolbox. *International Journal of Mathematical Education in Science and Technology*, 49(3):442–455.
- Polya, G. (2004). *How to solve it: A new aspect of mathematical method*, volume 85. Princeton University Press.
- Schoenfeld, A. H. (2014). *Mathematical problem solving*. Elsevier.
- Smith, M. S. & Stein, M. (1998). Selecting and creating mathematical tasks: From research to practice. *Mathematics Teaching in the Middle School*, 3.
- Star, J. R., Caronongan, P., Foegen, A. M., Furgeson, J., Keating, B., Larson, M. R., Lyskawa, J., McCallum, W. G., Porath, J., & Zbiek, R. M. (2015). Teaching strategies for improving algebra knowledge in middle and high school students.



Victor Oxman is an Associate Professor at Western Galilee College. Dr. Oxman is engaged in research to improve the methods of teaching mathematics. His research interests include the use of calculators and dynamic mathematics software as tools to foster open-ended problem posing and problem solving in the teaching mathematics, sciences, and technical subjects.



Moshe Stupel, is a professor and pre-service teacher educator in two academic colleges, Shaanan Academic College and Gordon College. In the past, Moshe was a high school principal. He has published and presented 40 papers on mathematics and mathematics education. Recently, his research is focused on various methods of problem solving and on variance and invariance property in dynamic geometrical environments (DGEs) in mathematics.